




$2n^3$




$-8$




$8$




$-2n^3$




$-18$




$18$




$11$



$-11$



$\frac{11}{16}$



$-\frac{11}{16}$

